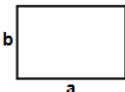
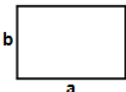


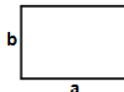


- 1)  Find perimeter of rectangle having sides $a = 863$ m and $b = 552$ m

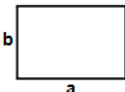
Answer: _____

- 2)  Find perimeter of rectangle having sides $a = 986$ cm and $b = 107$ cm

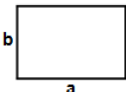
Answer: _____

- 3)  Find perimeter of rectangle having sides $a = 265$ m and $b = 139$ m

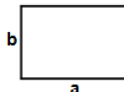
Answer: _____

- 4)  Find perimeter of rectangle having sides $a = 796$ cm and $b = 305$ cm


Answer: _____

- 5)  Find perimeter of rectangle having sides $a = 844$ ft and $b = 806$ ft


Answer: _____

- 6)  Find perimeter of rectangle having sides $a = 843$ ft and $b = 377$ ft


Answer: _____

- 7)  Find perimeter of rectangle having sides $a = 913$ in and $b = 853$ in

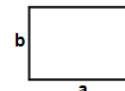
Answer: _____

- 8)  Find perimeter of rectangle having sides $a = 863$ ft and $b = 835$ ft

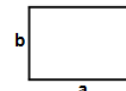
Answer: _____

- 9)  Find perimeter of rectangle having sides $a = 851$ cm and $b = 680$ cm

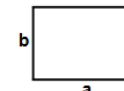
Answer: _____

- 10)  Find perimeter of rectangle having sides $a = 516$ in and $b = 457$ in

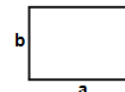
Answer: _____

- 11)  Find perimeter of rectangle having sides $a = 311$ cm and $b = 245$ cm

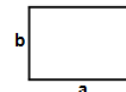
Answer: _____

- 12)  Find perimeter of rectangle having sides $a = 493$ m and $b = 463$ m

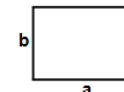
Answer: _____

- 13)  Find perimeter of rectangle having sides $a = 990$ m and $b = 946$ m

Answer: _____

- 14)  Find perimeter of rectangle having sides $a = 994$ cm and $b = 983$ cm

Answer: _____

- 15)  Find perimeter of rectangle having sides $a = 592$ cm and $b = 470$ cm

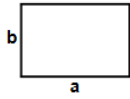
Answer: _____

Name: _____

October 28, 2021



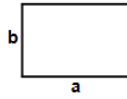
16)



Find perimeter of rectangle having sides $a = 478$ m and $b = 401$ m

Answer: _____

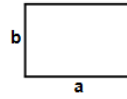
17)



Find perimeter of rectangle having sides $a = 526$ ft and $b = 424$ ft

Answer: _____

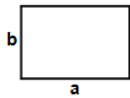
18)



Find perimeter of rectangle having sides $a = 603$ cm and $b = 217$ cm

Answer: _____

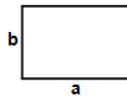
19)



Find perimeter of rectangle having sides $a = 949$ ft and $b = 306$ ft

Answer: _____

20)



Find perimeter of rectangle having sides $a = 971$ m and $b = 117$ m

Answer: _____

Total: ____ / 20

Name: _____

October 28, 2021

Sr: 28102021-2400

MATHS WORKSHEET

GENERATOR

**11-PLUS
SATS
GCSES**



Answers:

- | | | | | | | |
|------------|-----------|------------|------------|------------|-----------|------------|
| 1) 2830m | 2) 2186cm | 3) 808m | 4) 2202cm | 5) 3300ft | 6) 2440ft | 7) 3532in |
| 8) 3396ft | 9) 3062cm | 10) 1946in | 11) 1112cm | 12) 1912m | 13) 3872m | 14) 3954cm |
| 15) 2124cm | 16) 1758m | 17) 1900ft | 18) 1640cm | 19) 2510ft | 20) 2176m | |